

EDUCATION DAY WORKSHEET K-2

PRESENTED BY

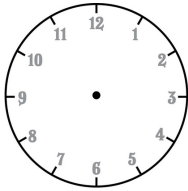


Unitil
energy for life

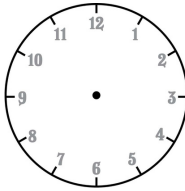
QUESTION #1

DRAW THE CORRECT START TIMES OF THE GAME ON THE CLOCKS BELOW:

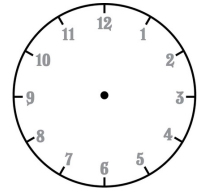
12:00



7:30



4:45



QUESTION #2

WRITE DOWN THE CORRECT ANSWER IN EACH BASEBALL:

1. $3+4=$



3. $7+1=$



5. $6+4=$



2. $5+10=$



4. $8+3=$



6. $2+7=$



QUESTION #3

WRITE DOWN THE NUMBER OF BALLS, STRIKES AND OUTS FOR EACH BATTER BASED ON THE PICTURES BELOW:



BALLS

STRIKES

OUTS



BALLS

STRIKES

OUTS

EDUCATION DAY WORKSHEET K-2

PRESENTED BY



Unitil
energy for life

QUESTION #4

SOLVE EACH SQUARE TO DISCOVER WHAT TO COLOR EACH SQUARE BASED ON THE COLOR CODE LISTED BELOW:

COLOR CODE:

BLUE: 1 OR 2
BLACK: 3 OR 4
RED: 5 OR 6

8-7	6-5	8-7	7-4	7-4	10-7	8-5	6-5	6-5	6-5
8-7	6-4	10-7					8-5	8-7	8-7
5-6	10-7	11-5					11-5	8-5	6-4
7-4			9-4			8-2			8-5
7-4			8-2			9-4			8-5
10-7			11-5			8-2			10-7
8-7	7-4	8-2					9-4	7-4	6-4
8-7	6-4	10-7					7-4	6-5	6-4
8-7	6-4	6-5	10-7	8-5	7-4	10-7	8-7	6-5	8-7

QUESTION #5

DRAW A LINE FROM THE GIVEN BASEBALL TERM TO THE CORRECT SHAPE:

- BASE**
- PITCHER'S MOUND**
- BASEBALL**
- INFIELD**
- DUGOUT**
- HOME PLATE**

- RECTANGLE**
- SQUARE**
- CIRCLE**
- PENTAGON**
- CIRCLE**
- DIAMOND**

